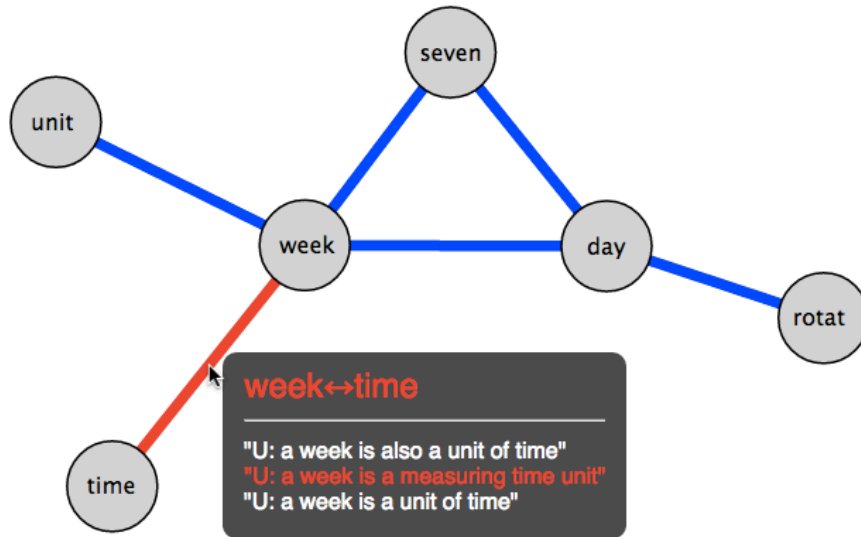


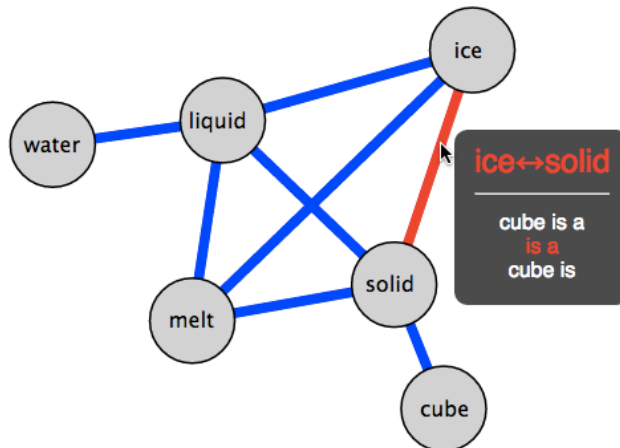
Supplementary Material

I. Screenshots of knowledge graph visualization tool to be released with paper.
Example questions are shown with the output over many dialogs for that question

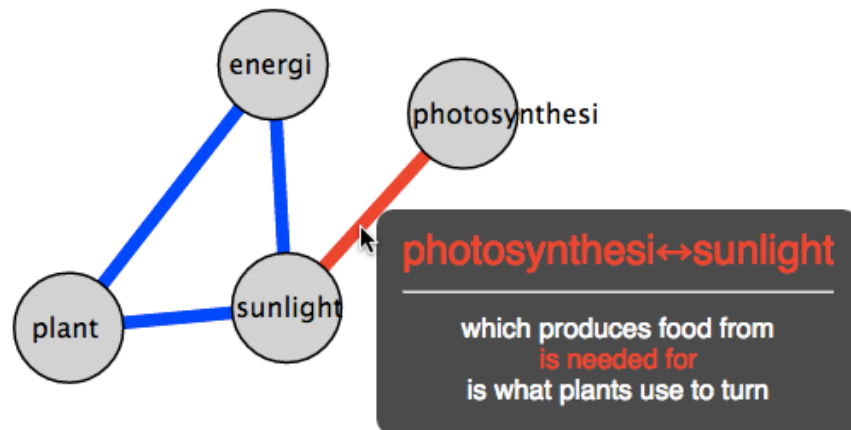
How long does it take for Earth to rotate on its axis seven times? (A) one day (B) one week (C) one month (D) one year



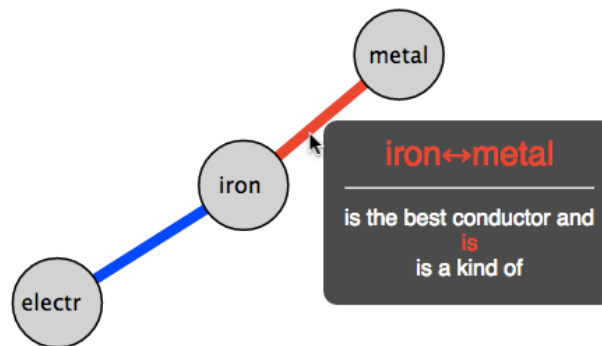
When an ice cube melts, its state of matter changes from a (A) gas to a liquid (B) solid to a liquid (C) liquid to a solid (D) solid to a gas



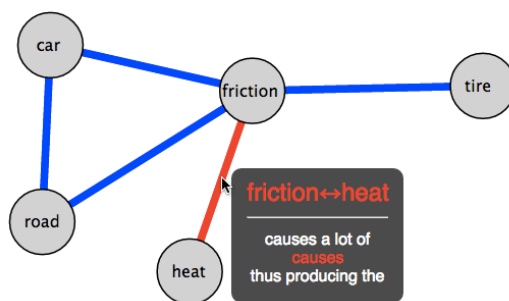
Green plants get the energy they need to make food from (A) air (B) sunlight (C) water (D) soil



. Which object is the best conductor of electricity? (A) a wax crayon (B) a plastic spoon (C) a rubber eraser (D) an iron nail



A car skids along the road and smoke appears to be coming from under the tires. The heat that produces the smoke is caused by (A) magnetism (B) sound (C) light (D) friction



Which sense can be used to determine an object's ability to reflect light? (A) sight (B) hearing (C) smell (D) taste

